

For More Visit VUStudents.pk

CS301 Final Term Papers By Waqar (File 2)

Question No : 1 of 52 Marks: 1 (Budgeted Time 1 Min)

Each operator in a postfix expression refers to the previous _____ operand(s).

Answer (Please select your correct option)

VuAnswers.com

One

Two **correct**

Three

Four

Made by: Waqar Siddhu

Question No : 2 of 52

Marks: 1 (Budgeted Time 1 Min)

In the linked list implementation of the queue class, where does the insert member function place the new entry on the linked list?

Answer (Please select your correct option)

VuAnswers.com

At the head

At the tail **correct**

After all other entries that are greater than the new entry.

After all other entries that are smaller than the new entry.

Made by: Waqar Siddhu

Question No : 3 of 52

Marks: 1 (Budgeted Time 1 Min)

If a complete binary tree has n number of nodes then its height will be,

Answer (Please select your correct option)

VuAnswers.com

$\log_2(n+1) - 1$ **correct**

2^n

$\log_2(n) - 1$

$2^n - 1$

Made by: Waqar Siddhu

For More Visit VUStudents.pk

Question No : 4 of 52

Marks: 1 (Budgeted Time 1 Min)

Binary Search is an algorithm of searching, used with the _____ data.

Answer (Please select your correct option)

VuAnswers.com

Sorted **correct**

Unsorted

Heterogeneous

Random

Made by: Waqar Siddhu

Question No : 5 of 52

Marks: 1 (Budgeted Time 1 Min)

Consider the following array
23 15 5 12 40 10 7
After the first pass of a particular algorithm, the array looks like
15 5 12 23 10 7 40
Name the algorithm used

Answer (Please select your correct option)

VuAnswers.com

Heap sort

Selection sort

Insertion sort

Bubble sort

Made by: Waqar Siddhu

Question No : 6 of 52

Marks: 1 (Budgeted Time 1 Min)

Consider a min heap, represented by the following array:
10,30,20,70,40,50,80,60
After inserting a node with value 31. Which of the following is the updated min heap?

Answer (Please select your correct option)

VuAnswers.com

10,30,20,31,40,50,80,60,70 **correct**

10,30,20,70,40,50,80,60,31

10,31,20,30,40,50,80,60,31

31,10,30,20,70,40,50,80,60

Made by: Waqar Siddhu

Question No : 7 of 52

Marks: 1 (Budgeted Time 1 Min)

We can build a heap in _____ time.

Answer (Please select your correct option)

VuAnswers.com

Linear **correct**

Exponential

Polynomial

None of the given options

Made by: Waqar Siddhu

Question No : 8 of 52

Marks: 1 (Budgeted Time 1 Min)

Suppose we had a hash table whose hash function is " $n \% 12$ ", if the number 35 is already in the hash table, which of the following numbers would cause a collision?

Answer (Please select your correct option)

VuAnswers.com

144

145 **correct**

143

148

Made by: Waqar Siddhu

Question No : 9 of 52

Marks: 1 (Budgeted Time 1 Min)

Which of the following stack operations could result in stack underflow ?

Answer (Please select your correct option)

VuAnswers.com

is_empty

pop **correct**

push

is_full

Made by: Waqar Siddhu

Question No : 10 of 52 Marks: 1 (Budgeted Time 1 Min)

It will be efficient to place stack elements at the start of the list because insertion and removal take _____ time.

Answer (Please select your correct option)

VuAnswers.com

Variable

Constant **correct**

Inconsistent

Non-linear

Made by: Waqar Siddhu

Question No : 11 of 52 Marks: 1 (Budgeted Time 1 Min)

The worst case of deletion in AVL tree requires _____.

Answer (Please select your correct option)

VuAnswers.com

Only one rotation

Rotation at each non-leaf node

Rotation at each leaf node

Rotations equal to $\log_2 N$ **correct**

Made by: Waqar Siddhu

Question No : 12 of 52 Marks: 1 (Budgeted Time 1 Min)

In Threaded Binary Tree, every node that does not have a left-child has a thread to its

Answer (Please select your correct option)

VuAnswers.com

in-order successor

pre-order successor

in-order predecessor **correct**

pre-order predecessor

Made by: Waqar Siddhu

Question No : 13 of 52

Marks: 1 (Budgeted Time 1 Min)

To create a _____, we link the last node with the first node in the list.

Answer (Please select your correct option)

VuAnswers.com

Doubly linked list

Circularly linked list **correct**

Linked list

Triply linked list

Made by: Waqar Siddhu

Question No : 14 of 52

Marks: 1 (Budgeted Time 1 Min)

By using _____, we avoid the recursive method of traversing a Tree.

Answer (Please select your correct option)

VuAnswers.com

Binary tree only

Threaded binary tree **correct**

Heap data structure

Huffman encoding

Made by: Waqar Siddhu

Question No : 15 of 52

Marks: 1 (Budgeted Time 1 Min)

Which of the following is TRUE about arrays ?

Answer (Please select your correct option)

VuAnswers.com

We can increase the size of arrays after their creation. **correct**

We can decrease the size of arrays after their creation.

We can increase but can't decrease the size of arrays after their creation.

We can neither increase nor decrease the array size after their creation.

Made by: Waqar Siddhu

Question No : 16 of 52

Marks: 1 (Budgeted Time 1 Min)

Here is an array of ten integers:

5 3 8 9 1 7 0 2 6 4

Array after the FIRST iteration of the main loop in **selection sort** algorithm will be (sorting from smallest to largest) :

Answer (Please select your correct option)

VuAnswers.com

0 3 8 9 1 7 5 2 6 4 **correct**

2 6 4 0 3 8 9 1 7 5

2 6 4 9 1 7 0 3 8 5

0 3 8 2 6 4 9 1 7 5

Made by: Waqar Siddhu

Question No : 17 of 52

Marks: 1 (Budgeted Time 1 Min)

When unions are done by weight (size), the depth of any element is never greater than

Answer (Please select your correct option)

VuAnswers.com

$\log_2 n$ **correct**

$n \log_2 n$

$n \log_2 n + 1$

$\log_2 n - 1$

Made by: Waqar Siddhu

Question No : 18 of 52

Marks: 1 (Budgeted Time 1 Min)

What is the best definition of *collision* in a hash table?

Answer (Please select your correct option)

VuAnswers.com

Two entries are identical except for their keys.

Two entries with different data have different keys.

Two entries with different keys have the same hash value. **correct**

Two entries with the same key have different hash values.

Made by: Waqar Siddhu

Question No : 19 of 52

Marks: 1 (Budgeted Time 1 Min)

Which of the following is NOT true regarding the maze generation?

- Randomly remove walls until the entrance and exit cells are in the same set.
- Removing a wall is the same as doing a union operation.
- Remove a randomly chosen wall if the cells it separates are already in the same set.
- Do not remove a randomly chosen wall if the cells it separates are already in the same set.

VuAnswers.com

Made by: Waqar Siddhu

Question No : 20 of 52

Marks: 1 (Budgeted Time 1 Min)

"++" is a ----- operator.

- Unary
- Binary **correct**
- Ternary
- Binary and Ternary

VuAnswers.com

Made by: Waqar Siddhu

Question No : 21 of 52

Marks: 1 (Budgeted Time 1 Min)

In the call by methodology, a copy of the object is passed to the called function.

- Reference
- Value **correct**
- Reference & Value
- Copy of the object can not be passed

VuAnswers.com

Made by: Waqar Siddhu

Question No : 22 of 52

Marks: 1 (Budgeted Time 1 Min)

In a skip list of 'n' elements, which level includes all the elements?

0 **correct**

1

2

3

VuAnswers.com

Made by: Waqar Siddhu

Question No : 23 of 52

Marks: 1 (Budgeted Time 1 Min)

In a skip list, list S_0 holds the keys of S in which of the following order?

Decreasing

Non-decreasing **correct**

Non-increasing

Random

VuAnswers.com

Made by: Waqar Siddhu

Question No : 24 of 52

Marks: 1 (Budgeted Time 1 Min)

The balance factor of an empty AVL tree is:

1

-1

2

0 **correct**

VuAnswers.com

Made by: Waqar Siddhu

Question No : 25 of 52

Marks: 1 (Budgeted Time 1 Min)

Hash function can reduce searching operation to in its best and average cases.

Answer (Please select your correct option)

VuAnswers.com

Constant time

Linear time

Algorithmic time **correct**

Quadratic time

Made by: Waqar Siddhu

Question No : 26 of 52

Marks: 1 (Budgeted Time 1 Min)

Best case running time of selection sort algorithm is:

Answer (Please select your correct option)

VuAnswers.com

(n)

(n^2)

$(\log n)$

$(n \log n)$ **correct**

Made by: Waqar Siddhu

Question No : 27 of 52

Marks: 1 (Budgeted Time 1 Min)

If a list contains 32 elements, how many times the list must split during merge sort?

Answer (Please select your correct option)

VuAnswers.com

Log (32) times

32 times

16 times

Log $(32/2)$ times **correct**

Made by: Waqar Siddhu

Question No : 28 of 52

Marks: 1 (Budgeted Time 1 Min)

.....in equivalence relations is as, if x leads to y and y to z then x leads to z.

Answer (Please select your correct option)

VuAnswers.com

- Equality
- Symmetry
- Non-Symmetry
- Transitivity **correct**

Made by: Waqar Siddhu

Question No : 29 of 52

Marks: 1 (Budgeted Time 1 Min)

Return value of `getMin()` method is always of MinHeap.

Answer (Please select your correct option)

VuAnswers.com

- Root
- Right
- Left
- Leaf

Made by: Waqar Siddhu

Question No : 30 of 52

Marks: 1 (Budgeted Time 1 Min)

Which formula is the best approximation for the depth of a heap with n nodes?

Answer (Please select your correct option)

VuAnswers.com

- $\log_2(n)$
- The number of digits in n (base 10), e.g., 145 has three digits
- The square root of n
- n

Made by: Waqar Siddhu

Question No : 31 of 52

Marks: 1 (Budgeted Time 1 Min)

A complete binary tree of height ____ has nodes between 16 to 31.

Answer (Please select your correct option)

VuAnswers.com

2

3

4

5

Made by: Waqar Siddhu

Question No : 32 of 52

Marks: 1 (Budgeted Time 1 Min)

get () method of list is:

Answer (Please select your correct option)

VuAnswers.com

zero step method

one step method correct

two step method

three step method

Made by: Waqar Siddhu

Question No : 33 of 52

Marks: 1 (Budgeted Time 1 Min)

Using Huffman Encoding for data to be sent on network enables us to send it with....

Answer (Please select your correct option)

VuAnswers.com

Large data size and More transmission time

Small data size and More transmission time

Small data size and Less transmission time

Large data size and Less transmission time correct

Made by: Waqar Siddhu

Question No : 34 of 52

Marks: 1 (Budgeted Time 1 Min)

Which of the following is the most significant part of compilers?

- AVL tree
- Expression tree **correct**
- Array
- Binary tree

VuAnswers.com

Made by: Waqar Siddhu

Question No : 35 of 52

Marks: 1 (Budgeted Time 1 Min)

Which of the following is NOT a factor in *Union by Size*?

- Maintains sizes (number of nodes) of all trees
- Makes smaller tree, the subtree of the larger one
- Makes the larger tree, the subtree of the smaller one
- Maintains sizes (number of nodes) while performing union operation

VuAnswers.com

Made by: Waqar Siddhu

Question No : 36 of 52

Marks: 1 (Budgeted Time 1 Min)

A binary tree with 24 internal nodes has _____ external nodes.

- 22
- 23
- 48
- 25

VuAnswers.com

Made by: Waqar Siddhu

Question No : 37 of 52

Marks: 1 (Budgeted Time 1 Min)

If there are N external nodes in a Binary tree, then number of internal nodes will be:

$N - 1$

$N + 1$ **correct**

$N + 2$

N

VuAnswers.com

Made by: Waqar Siddhu

Question No : 38 of 52

Marks: 1 (Budgeted Time 1 Min)

If there are 56 internal nodes in a binary tree then how many external nodes this binary tree will have?

54

55

56

57 **correct**

VuAnswers.com

Made by: Waqar Siddhu

Question No : 39 of 52

Marks: 1 (Budgeted Time 1 Min)

In disjoint sets, union is a _____ time operation.

Constant **correct**

Variable

Exponential

Quadratic

VuAnswers.com

Made by: Waqar Siddhu

Question No : 40 of 52 Marks: 1 (Budgeted Time 1 Min)

Which of the following is NOT an example of equivalence relation?

Electrical connectivity

Set of people

\leq relation **correct**

Set of pixels

VuAnswers.com

Made by: Waqar Siddhu

Question No : 41 of 52 Marks: 2 (Budgeted Time 4 Min)

In array representation of a Heap, if parent node is present at index i then at what indexes child nodes are present ?

Answer (Please [click here](#) to Add Answer)

VuAnswers.com

Rich text editor toolbar with icons for Bold, Italic, Underline, Text Color, Background Color, Bulleted List, Numbered List, Indent, Outdent, Undo, Redo, and a 100% zoom level. The text area is currently empty.

Made by: Waqar Siddhu

Question No : 42 of 52 Marks: 2 (Budgeted Time 4 Min)

Give any two important characteristics of skip list.

Answer (Please [click here](#) to Add Answer)

VuAnswers.com

Rich text editor toolbar with icons for Bold, Italic, Underline, Text Color, Background Color, Bulleted List, Numbered List, Indent, Outdent, Undo, Redo, and a 100% zoom level. The text area is currently empty.

Made by: Waqar Siddhu


Question No : 43 of 52

Marks: 2 (Budgeted Time 4 Min)

How we can use Disjoint sets for Image Segmentation ?

Answer (Please [click here](#) to Add Answer)

VuAnswers.com



Made by: Waqar Siddhu

Question No : 44 of 52


Marks: 2 (Budgeted Time 4 Min)

Give array representation of the following stack.



Answer (Please [click here](#) to Add Answer)

VuAnswers.com



Made by: Waqar Siddhu


Question No : 45 of 52

Marks: 3 (Budgeted Time 6 Min)

Write down the code for isEmpty() and isFull() functions of the Stack data structure implemented through Arrays.

Answer (Please [click here](#) to Add Answer)

VuAnswers.com



Made by: Waqar Siddhu

Question No : 46 of 52

Marks: 3 (Budgeted Time 6 Min)

Consider the min-heap represented in the following array:

1	2	3	4	5	6	7	8	9	10	11
13	15	19	16	18	40	20	24	36	21	

Show the updated min-heap in the array after inserting 14.

Answer ([Please click here to Add Answer](#))

VuAnswers.com

Made by: Waqar Siddhu

Question No : 47 of 52

Marks: 3 (Budgeted Time 6 Min)

Here is an array of ten integers:

5 3 8 9 1 7 0 2 6 4

Draw this array after the FIRST iteration of main loop of insertion sort (sorting from smallest to largest). This iteration has shifted at least one item in the array!

Answer ([Please click here to Add Answer](#))

VuAnswers.com

Made by: Waqar Siddhu

Question No : 48 of 52

Marks: 3 (Budgeted Time 6 Min)

What is an Equivalence relation? Give any two examples.

Answer ([Please click here to Add Answer](#))

VuAnswers.com

Made by: Waqar Siddhu

Question No : 49 of 52

Marks: 5 (Budgeted Time 10 Min)

Perform the Preorder and Inorder traversal on the tree given below and show the result in both cases (you have to perform the traversal manually not using any programming language)



Answer ([Please click here to Add Answer](#))

VuAnswers.com

Rich text editor toolbar with options for font (Normal, Arial), size (12), and bold/italic/underline. The editor area is currently empty.

Made by: Waqar Siddhu

Question No : 50 of 52

Marks: 5 (Budgeted Time 10 Min)

Following function searches an element from a sorted array. But there are some mistakes in it, you are required to find and correct those mistakes.

```
int isPresent(int *arr, int val, int N)
{
    int low = 0;
    int high = N - 1;
```

Answer ([Please click here to Add Answer](#))

VuAnswers.com

Rich text editor toolbar with options for font (Normal, Arial), size (12), and bold/italic/underline. The editor area is currently empty.

Made by: Waqar Siddhu

VUStudents

For More Visit VUStudents.pk

Question No : 51 of 52

Marks: 5 (Budgeted Time 10 Min)

Consider the following keys,
57 , 45 , 60 , 75 , 95

Draw an array of size 13 and apply the hash function $f(h) = \text{key} \% 13$ to find the hash values and store these keys in this array.

Answer (Please [click here](#) to Add Answer)

VuAnswers.com

Rich text editor toolbar with options for font style, size, color, background color, bold, italic, underline, link, unlink, list, and image. The text area is currently empty.

Made by: Waqar Siddhu

Question No : 52 of 52

Marks: 5 (Budgeted Time 10 Min)

We can use a heap to implement a priority queue.

The **Remove()** function returns the highest priority item that will be the maximum heap element .

Write C++ code for **Remove()** function of priority queue . You must have to use heap in the implementation of these functions.

Answer (Please [click here](#) to Add Answer)

VuAnswers.com

Rich text editor toolbar with options for font style, size, color, background color, bold, italic, underline, link, unlink, list, and image. The text area is currently empty.

Made by: Waqar Siddhu

For More Visit VUStudents.pk